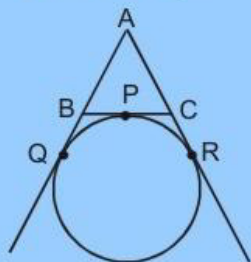


## Applications

## CIRCLES

A circle touches the side BC of a  $\triangle ABC$  at P and touches AB and AC when produced at Q and R respectively then  $AQ = \frac{1}{2}(\text{Perimeter of } \triangle ABC)$ .



$$AQ = AR \dots (i)$$

$$BQ = BP \dots (ii)$$

$$CP = CR \dots (iii)$$

[Tangents drawn from an external point to a circle are equal]

Now, perimeter of  $\triangle ABC$

$$= AB + BC + CA$$

$$= AB + BP + PC + CA$$

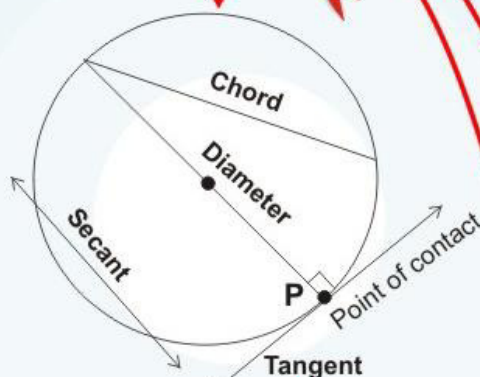
$$= (AB + BQ) + (CR + CA) \text{ [From (ii) and (iii)]}$$

$$= AQ + AR = AQ + AQ \text{ [From (i)]}$$

$$AQ = \frac{1}{2}(\text{Perimeter of } \triangle ABC).$$

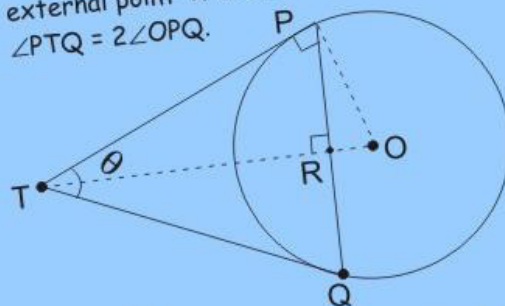
### Special Note :

1. If quadrilateral ABCD is circumscribing a circle, then  $AB + CD = AD + BC$ .
2. If all the sides of a parallelogram touches a circle, then the parallelogram is a rhombus.



Special case of secant with only one point of contact.

Two tangents TP and TQ are drawn to a circle with centre O from an external point T. Prove that  $\angle PTQ = 2\angle OPQ$ .

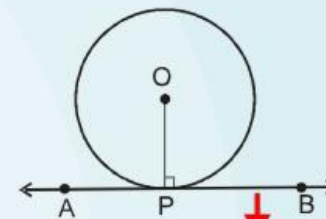


In  $\triangle PTQ$   
 $TP = TQ$ , hence  $\angle TQP = \angle QPT = \frac{1}{2}(180^\circ - \theta)$

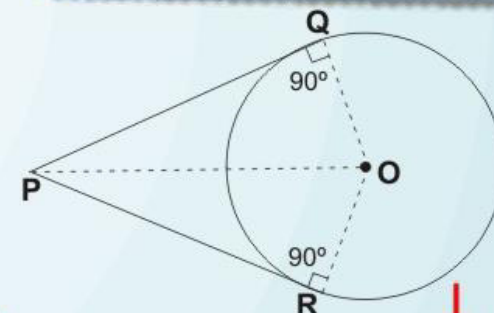
Since  $\angle OPT = 90^\circ$ ,  $\angle OPQ = \angle OPT - \angle TPQ$

$$\angle OPQ = 90^\circ - \frac{1}{2}(180^\circ - \theta)$$

$$\Rightarrow \angle PTQ = 2\angle OPQ.$$



A tangent to a circle is perpendicular to the radius through the point of contact. i.e.  $OP \perp AB$



Length of two tangent drawn from external point are equal  
 In  $\triangle OQP$  &  $\triangle ORP$

$$\angle OQP = \angle ORP \text{ (Each } 90^\circ)$$

$$OP = OP, \text{ (Common)}$$

$$OQ = OR \text{ (radius)}$$

$$\therefore \triangle OQP \cong \triangle ORP \Rightarrow PQ = PR$$

### Results :

- (i) If two tangents are drawn to a circle from an external point, then they subtend equal angles at the centre.  $\angle POQ = \angle POR$
- (ii) If two tangents are drawn to a circle from an external point, they are equally inclined to the segment, joining the centre to that point  $\angle OPQ = \angle OPR$